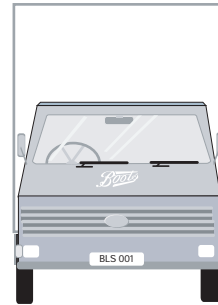





Making a Delivery

Write the names of these countries on the correct dotted line.

England Scotland Wales Ireland



The  takes 30 minutes to get from the  to the .

The  then travels to the next  which takes 1 hour. How long is the journey all together? _____

It takes 1 hour for the lorry to get to **Clydebank** from **Coatbridge** and 30 minutes to get from Clydebank to **Braedhead Park**. The lorry then travels to **Cardonald** which takes another 10 minutes. How long is the journey altogether? _____

The lorry travels 60 miles from the warehouse in **Plymouth** to the store at **Truro**. From **Truro** the lorry travels 19 miles to **Helston** and 11 miles to **Redruth**.

How many miles long is the journey? _____

How long would the journey from **Plymouth** to **Redruth** and back again be if the Driver went back the same way? _____

